



Name \_\_\_\_\_

Date: \_\_\_\_\_

Q 1) Mental Maths

a)  $5 \times 5 =$  \_\_\_\_\_

e)  $16 - 4 =$  \_\_\_\_\_

b)  $17 + 11 =$  \_\_\_\_\_

f)  $18 - 3 =$  \_\_\_\_\_

c)  $68 - 0 =$  \_\_\_\_\_

g)  $12 + 0 =$  \_\_\_\_\_

d)  $14 + 14 =$  \_\_\_\_\_

h)  $7 + 4 =$  \_\_\_\_\_

Q2) Write T for true and F for false.

a) Half past 7 is same as 7:30. \_\_\_\_\_

b)  $6 \times 5 = 35$  \_\_\_\_\_

c) When we multiply any number by zero the answer is always zero.  
\_\_\_\_\_

d) 7 times 2 = 14 \_\_\_\_\_

Q 4) Complete the table:

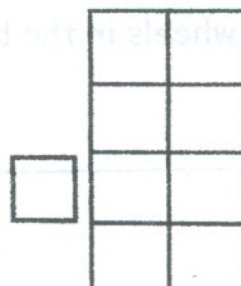
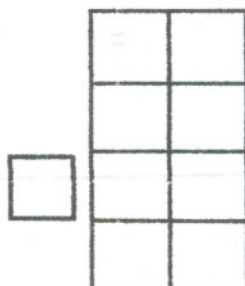
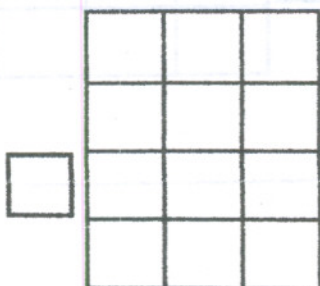
|    | Repeated Addition Sentence | Multiplication Sentence |
|----|----------------------------|-------------------------|
| a) |                            | 5 times 4               |
| b) | 8+8                        |                         |
| c) |                            | 10 times 10             |

Q 2) Write in columns & solve.

a)  $20 \times 5$

b)  $56 + 17$

c)  $71 - 49$



Q 5) Read and write the time in two ways.



\_\_\_\_\_

\_\_\_\_\_



\_\_\_\_\_

\_\_\_\_\_

Q6 Kiaan had 64 blue balls and 19 green balls. How many balls does he have?

Number of blue balls =

Number of green balls =

Total number of balls =

So, \_\_\_\_\_

|   |   |
|---|---|
| T | O |
|   |   |
|   |   |
|   |   |

Q 8) There are 58 bicycles. Each bicycle has 2 wheels. How many wheels are there in all?

Number of bicycles =

Number of wheels in each bicycle =

Total wheels in the bicycles =

So, \_\_\_\_\_

|   |   |   |
|---|---|---|
| H | T | O |
|   |   |   |
|   |   |   |
|   |   |   |